

Test Form A

Name _____ Date _____

Chapter P

Class _____ Section _____

1. Find all intercepts of the graph of
- $y = \frac{x+2}{x-3}$
- .

(a) $(-2, 0)$

(b) $(-2, 0), (3, 0)$

(c) $\left(0, \frac{2}{3}\right), (3, 0)$

(d) $(-2, 0), \left(0, -\frac{2}{3}\right)$

(e) None of these

2. Determine if the graph of
- $y = \frac{x}{x^2 - 4}$
- is symmetrical with respect to the
- x
- axis, the
- y
- axis, or the origin.

(a) About the x -axis(b) About the y -axis

(c) About the origin

(d) All of these

(e) None of these

3. Find all points of intersection of the graphs of
- $x^2 - 2x - y = 6$
- and
- $x - y = -4$
- .

(a) $(0, -6), (0, 4)$

(b) $(10, 14), (13, 17)$

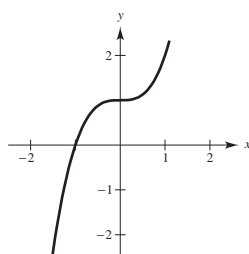
(c) $(5, 9), (-2, 2)$

(d) $(-5, -1), (2, 6)$

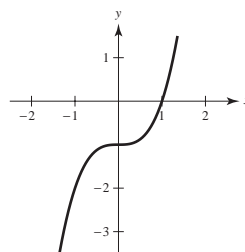
(e) None of these

4. Which of the following is a sketch of the graph of the function
- $y = x^3 + 1$
- ?

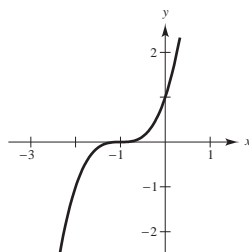
(a)



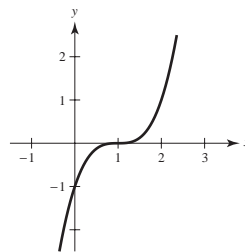
(b)



(c)



(d)



(e) None of these

5. Find an equation for the line passing through the point
- $(4, -1)$
- and perpendicular to the line
- $2x - 3y = 3$
- .

(a) $y = \frac{2}{3}x - 1$

(b) $3x + 2y + 2 = 0$

(c) $2x + 3y = 10$

(d) $3x + 2y = 10$

(e) None of these

6. Find the domain of $f(x) = \frac{1}{\sqrt{3-2x}}$.

- (a) $\left(-\infty, \frac{3}{2}\right)$ (b) $\left[\frac{3}{2}, \infty\right)$ (c) $\left(\frac{3}{2}, \infty\right)$
 (d) $\left(-\infty, \frac{3}{2}\right) \cup \left(\frac{3}{2}, \infty\right)$ (e) None of these

7. Find $f(x + \Delta x)$ for $f(x) = x^3 + 1$.

- (a) $x^3 + 1 + \Delta x$ (b) $x^3 + 3x^2(\Delta x) + 3x(\Delta x)^2 + (\Delta x)^3 + 1$
 (c) $x^3 + (\Delta x)^3 + 1$ (d) $\Delta^3 x^6 + 1$
 (e) None of these

8. If $f(x) = \frac{1}{\sqrt{x}}$ and $g(x) = 1 - x^2$, find $f(g(x))$.

- (a) $\frac{1-x^2}{\sqrt{x}}$ (b) $\frac{1}{\sqrt{1-x^2}}$ (c) $1 - \frac{1}{x}$
 (d) $\frac{1}{\sqrt{x}} + 1 - x^2$ (e) None of these

9. If the point $\left(-3, \frac{1}{2}\right)$ lies on the graph of the equation $2x + ky = -11$, find the value of k .

- (a) $-\frac{5}{2}$ (b) -34 (c) $-\frac{17}{2}$
 (d) -10 (e) None of these

10. Which of the following equations expresses y as a function of x ?

- (a) $3y + 2x - 9 = 17$ (b) $2x^2y + x = 4y$ (c) Both **a** and **b**
 (d) Neither **a** nor **b** (e) $3y^2 - x^2 = 5$

11. Given $f(x) = x^2 - 3x + 4$, find $f(x + 2) - f(2)$.

- (a) $x^2 - 3x + 4$ (b) $x^2 + x$ (c) $x^2 + x - 8$
 (d) $x^2 - 3x - 4$ (e) None of these

12. Determine which function is neither even nor odd.

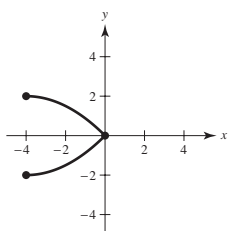
- (a) $f(x) = \tan x$ (b) $f(x) = 3x^5 + 5x^3 + 1$ (c) $f(x) = \frac{3}{x^2}$
 (d) $f(x) = \sqrt{x^2 + 1}$ (e) Both **a** and **b**

13. Find the point that lies on the line determined by the points $(1, -2)$ and $(-3, 1)$.

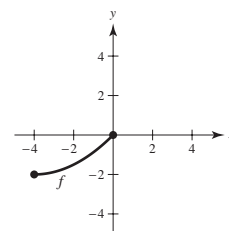
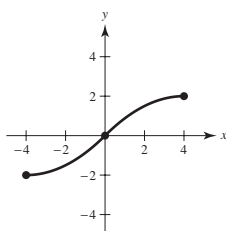
- (a) $(0, 0)$ (b) $(5, 1)$ (c) $(4, -6)$
 (d) $(5, -5)$ (e) $(-2, 0)$

14. The domain of the function f shown in the figure is $-4 \leq x \leq 4$. Choose the complete graph of f if f is even.

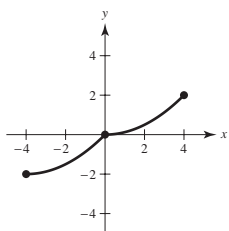
(a)



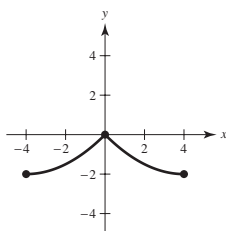
(b)



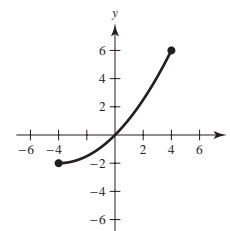
(c)



(d)



(e)

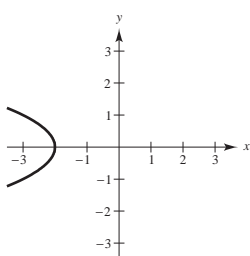


15. Describe the transformation needed to sketch the graph of $y = \frac{1}{x-2}$ using the graph of $f(x) = \frac{1}{x}$.

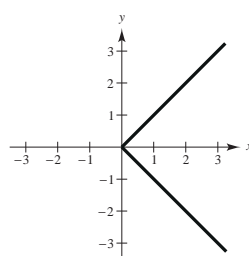
- (a) Shift $f(x)$ two units to the right.
- (b) Shift $f(x)$ two units to the left.
- (c) Shift $f(x)$ two units upward.
- (d) Shift $f(x)$ two units downward.
- (e) Reflect $f(x)$ about the x -axis.

16. Use the vertical line test to determine which of the following graphs represent y as a function of x .

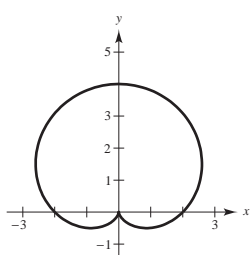
(a)



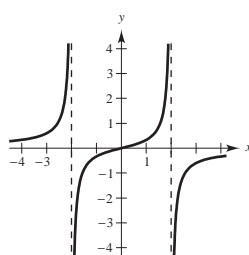
(b)



(c)



(d)



(e) None of these

17. Let $f(x) = \begin{cases} \frac{1}{x} & x < 0 \\ 2x + 1, & x \geq 0 \end{cases}$. Find $f(3)$.

- (a) $\frac{1}{3}$ (b) 1 (c) 7
(d) Undefined (e) $\frac{22}{3}$

18. The dollar value of a product in 1998 is \$1430. The value of the product is expected to increase \$83 per year for the next 5 years. Write a linear equation that gives the dollar value V of the product in terms of the year t . (Let $t = 8$ represent 1998.)

- (a) $V = 1430 + 83(t - 8)$ (b) $V = 83 + 1430t$ (c) $V = 1430 + 83t$
(d) $V = 83 + 1430(t + 8)$ (e) $V = 1430 + 83(t + 8)$

19. During the first and second quarters of the year, a business had sales of \$150,000 and \$185,000, respectively. If the growth of sales follows a linear pattern, what will sales be during the fourth quarter?

- (a) \$220,000 (b) \$235,000 (c) \$335,000
(d) \$255,000 (e) None of these

20. In order for a company to realize a profit in the manufacture and sale of a certain item, the revenue, R , for selling x items must be greater than the cost, C , of producing x items. If $R = 79.99x$ and $C = 61x + 1050$, for what values of x will this product return a profit?

- (a) $x \geq 55$ (b) $x \geq 8$ (c) $x \geq 18$
(d) $x \geq 56$ (e) None of these